

Homework Sheet

Monday 9th February - Friday 13th February 2026



Reading - Books will be sent home from next week.

Please ensure your child reads at least **3 times a week** for at least **15 minutes** and that this is recorded in their reading record. **Reading records** must be handed in on **Friday** and new books will be sent home on **Friday**. Your child will be sent home with a levelled reading book and a book of their choice in order to promote a love of reading.



Spellings

There are no spelling for this half term - but we would you to try and some of the following:

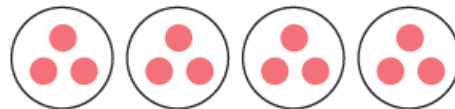
- Visit your local library.
- Go for a nature walk.
- Paint a picture.
- Make a den.
- Tell a joke.
- Bake a cake.
- Do a good deed.
- Play a board game.



Times Tables

Explain the mistake in the statement below.

There are 3 equal groups with 4 in each group.



Circle the numbers that are **not** multiples of 3.

60	11	21
	6	4
23	15	

Spring 2 - Half-Term Project

Our science topic for next half term is **Animals Including Humans**. For your half-term project, we would like you to make a skeleton. This can be made out of pasta, straws, card with split pins or just a drawing!



This Week's Learning

English

This half term, we would like you to do some grammar practise.

a


Mr Whoops has made three clumsy spelling mistakes in his sentence. Can you underline them and correct them?

Last night, I saw an illusionist, who was a member of the magic circle, perform varyous piculiar tricks at a local magic show.

c

Underline all the verbs in this sentence:

Tomorrow, my team are playing in the cup final and I am the top goal scorer.



b

Can you add two adjectives and an appropriate punctuation mark into this sentence to describe the train?

The _____ train sped past the station.

d

Are these sentences commands, exclamations, statements or questions?

Did you see the news

How terrible that is

Put that down

Maths

Section 1

Match the numbers up to add the totals to 100.

20	60
40	30
30	80
70	70


Section 2

Fill in the missing numbers.

12	14		18		22
----	----	--	----	--	----

Section 3

Draw the rest of the square.



What is the perimeter of the shape?

Section 4

1kg = g

2m = cm

3 litres = ml

Section 5

A hat costs £12.20.

How much will it cost in the half price sale?

Section 6

× 4 = 40

× 6 = 30

× 2 = 24

Section 7

Kamil is twice as old as his brother.

His brother is 3.

How old is Kamil?

Section 8

Which sign is missing?

2 3 = 6

12 4 = 8